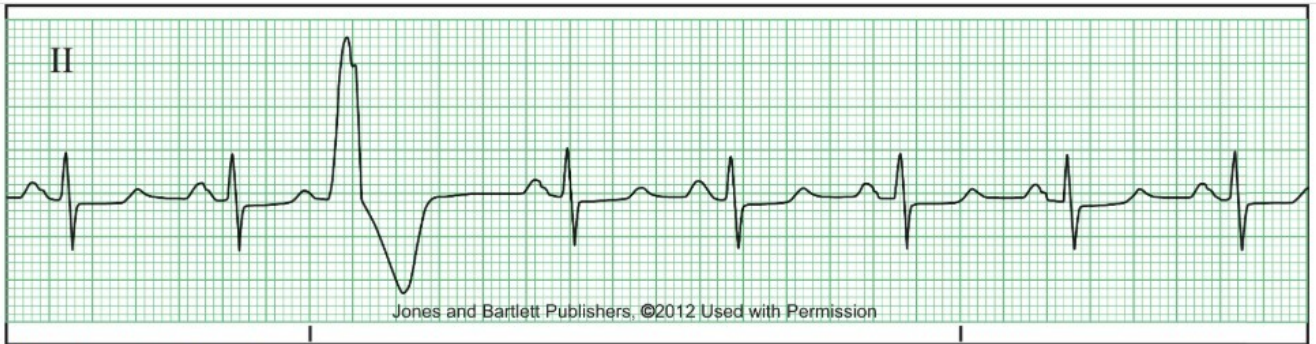


Relias Dysrhythmia Basic Test Answers 2023 Dysrhythmia – Basic A

Dysrhythmia – Basic A

Question 1 of 35

Time Remaining: 34



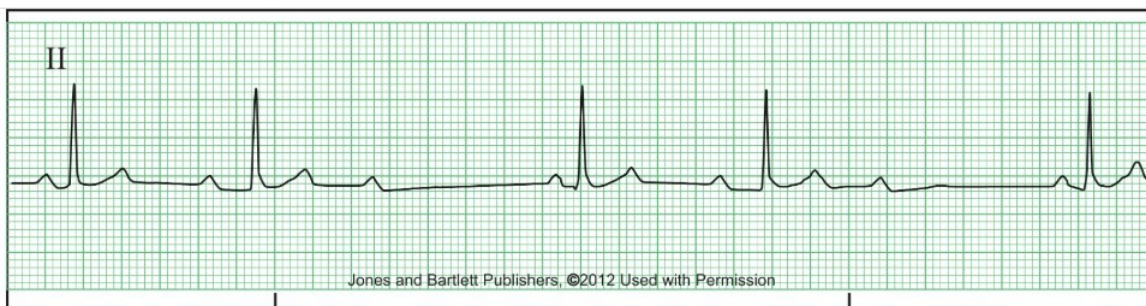
What is the cardiac rhythm?

- A Sinus tachycardia
- B Sinus rhythm with PVC
- C Normal sinus rhythm
- D Sinus rhythm with PAC

learnexams

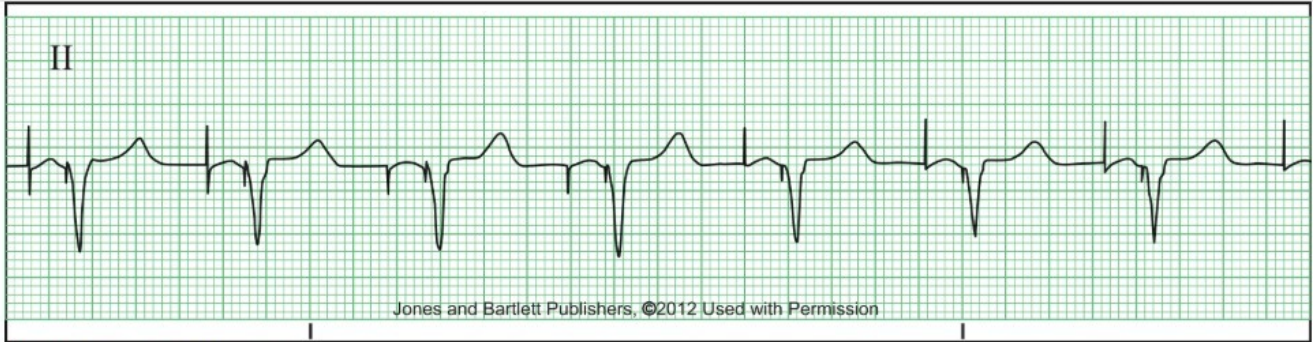
Question 2 of 35

Time Remaining: 33:46



What is the cardiac rhythm?

- A 3rd degree heart Block
- B 2nd degree AV block - Type I (Mobitz I)
- C Sinus bradycardia
- D Sinus rhythm with 1st degree AV block



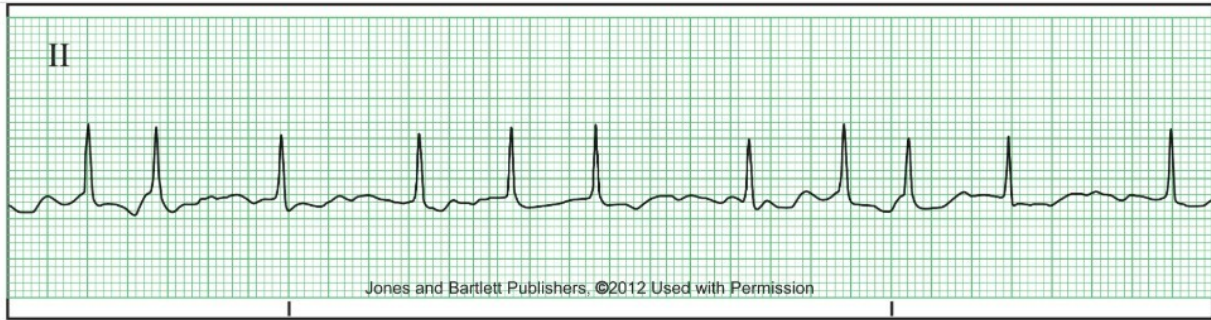
What is the cardiac rhythm?

- A Atrial fibrillation
- B Paced rhythm
- C Idioventricular
- D Junctional rhythm



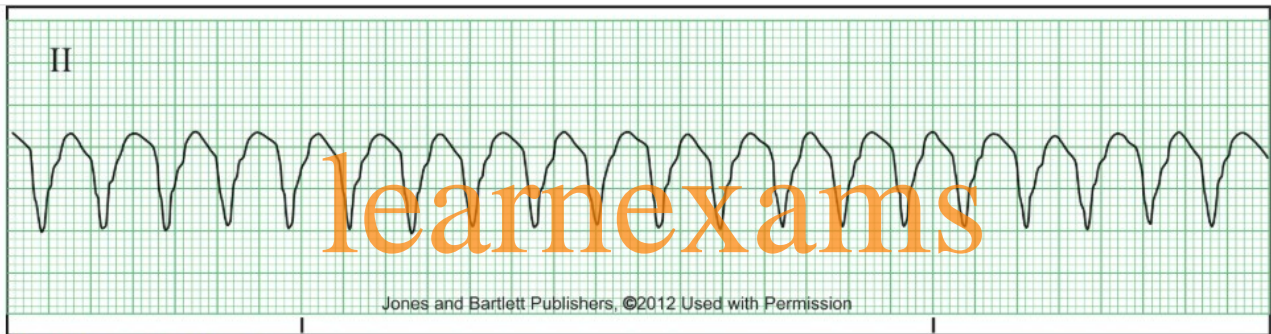
What is the cardiac rhythm?

- A Atrial flutter
- B Sinus rhythm with PACs
- C Atrial fibrillation
- D Atrial fibrillation with rapid ventricular response



What is the cardiac rhythm?

- A Atrial flutter
- B Atrial fibrillation with rapid ventricular response
- C Sinus tachycardia
- D Junctional rhythm



What is the cardiac rhythm?

- A Ventricular tachycardia
- B Sinus tachycardia
- C Ventricular fibrillation
- D Accelerated idioventricular